



Arbeitsblatt Notenschrift 1. Klasse

1. Notiere zuerst die untenstehenden Noten in das leere Notensystem, geordnet von tief nach hoch. Schreibe dann die Notennamen an, mit der richtigen Oktavbezeichnung.




A musical staff in treble clef with a G-clef. It contains several scattered notes: a quarter note on the first line (G4), a quarter note on the second space (A4), a quarter note on the second line (F4), a quarter note on the second space (A4), a quarter note on the second line (F4), a quarter note on the first space (E4), a quarter note on the first line (G4), a quarter note on the first space (E4), a quarter note on the first line (G4), a quarter note on the first space (E4), a quarter note on the first line (G4), a quarter note on the first space (E4), a quarter note on the first line (G4), a quarter note on the first space (E4), a quarter note on the first line (G4), a quarter note on the first space (E4), a quarter note on the first line (G4), a quarter note on the first space (E4), a quarter note on the first line (G4), a quarter note on the first space (E4). Below the staff is an empty five-line staff.

2. Zeichne die Notenhäse ein und schreibe die Notennamen an (mit Oktavbezeichnung).




A musical staff in treble clef with a G-clef. It contains several notes with stems to be drawn: a quarter note on the first line (G4), a quarter note on the first space (A4), a quarter note on the second line (B4), a quarter note on the second space (C5), a quarter note on the second line (B4), a quarter note on the second space (C5), a quarter note on the second line (B4), a quarter note on the second space (C5), a quarter note on the second line (B4), a quarter note on the second space (C5), a quarter note on the second line (B4), a quarter note on the second space (C5), a quarter note on the second line (B4), a quarter note on the second space (C5), a quarter note on the second line (B4), a quarter note on the second space (C5), a quarter note on the second line (B4), a quarter note on the second space (C5), a quarter note on the second line (B4), a quarter note on the second space (C5).




A musical staff in treble clef with a G-clef. It contains several notes with stems to be drawn: a quarter note on the first line (G4), a quarter note on the first space (A4), a quarter note on the second line (B4), a quarter note on the second space (C5), a quarter note on the second line (B4), a quarter note on the second space (C5), a quarter note on the second line (B4), a quarter note on the second space (C5), a quarter note on the second line (B4), a quarter note on the second space (C5), a quarter note on the second line (B4), a quarter note on the second space (C5), a quarter note on the second line (B4), a quarter note on the second space (C5), a quarter note on the second line (B4), a quarter note on the second space (C5), a quarter note on the second line (B4), a quarter note on the second space (C5), a quarter note on the second line (B4), a quarter note on the second space (C5).

3. Notiere die angegebenen Noten.



An empty five-line musical staff.

e' a'' h' g c' e''' c'' e'' g'' c''' d'



An empty five-line musical staff.

f' f'' a g' h'' a' f h d''' h' d''

Arbeitsblatt Notenschrift 1. Klasse

1. Notiere zuerst die untenstehenden Noten in das leere Notensystem, geordnet von tief nach hoch. Schreibe dann die Notennamen an, mit der richtigen Oktavbezeichnung.

Two empty musical staves in treble clef, each with a grand staff (treble and bass clefs) for transcription. The notes to be transcribed are: h, c', d', e', f', g', a', h', c'', d'', e'', f'', g'', a''.

h c' d' e' f' g' a' h' c'' d'' e'' f'' g'' a''

2. Zeichne die Notenhäule ein und schreibe die Notennamen an (mit Oktavbezeichnung).

Two musical staves in treble clef. The first staff contains notes with stems: d', f', a', c'', h', d'', f'', e'', g'', a'', c', h. The second staff contains notes with stems: a, e', g', h'', c''', g, f, d'''. The notes are to be drawn into the staves and labeled with their names and octave designations.

d' f' a' c'' h' d'' f'' e'' g'' a'' c' h

a e' g' h'' c''' g f d'''

3. Notiere die angegebenen Noten.

Two musical staves in treble clef. The first staff contains notes with stems: e', a'', h', g, c', e''', c'', e'', g'', c''', d'. The second staff contains notes with stems: f', f'', a, g', h'', a', f, h, d''', h', d''. The notes are to be drawn into the staves and labeled with their names and octave designations.

e' a'' h' g c' e''' c'' e'' g'' c''' d'

f' f'' a g' h'' a' f h d''' h' d''