
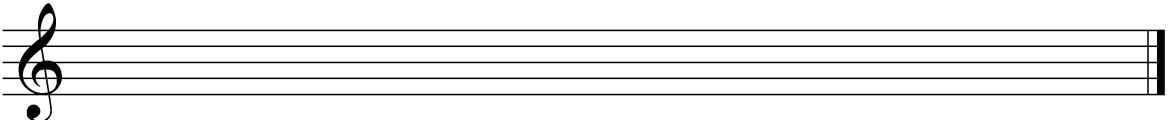


1. Schreiben Sie den verlangten Drei- bzw. Vierklang



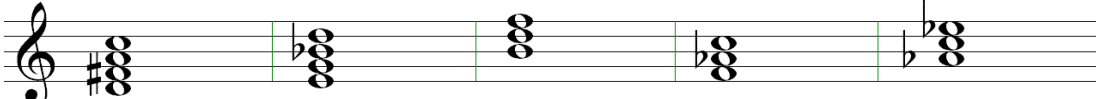
F-7	C°	E7	A-7	B ^b +	E-	C#-
-----	----	----	-----	------------------	----	-----



A+	B°	D ^b	A-7	D+	F7	D7
----	----	----------------	-----	----	----	----

2. Bestimmen Sie die folgenden Akkorde






1. Schreiben Sie den verlangten Drei- bzw. Vierklang

The image shows two staves of musical notation. The top staff contains seven chords: D7 (F major), C#m7 (C# minor), E7 (D major), F#m7 (F# minor), G7 (F major), A7 (G major), and B7 (A major). The bottom staff contains seven chords: C#m7 (C# minor), D7 (F major), E7 (D major), F#m7 (F# minor), G7 (F major), A7 (G major), and B7 (A major).

2. Bestimmen Sie die folgenden Akkorde

The image shows a single staff of musical notation with five chords: D7 (F major), C#m7 (C# minor), A7b9 (A minor), G7 (F major), and G7sus4 (G major).

D-7

C#-

A^b maj7

G maj7

G^{sus4}

The image shows a single staff of musical notation with five chords: D7 (F major), E7b9 (E minor), B° (B diminished), F- (F minor), and Ab (A minor).

D7

E^o7

B^o

F-

A^b